

Tu ed io abbiamo, insieme, 12 palline.

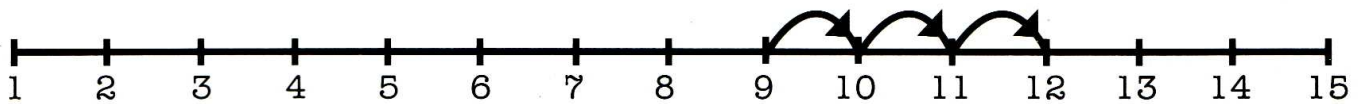
Le palline mie sono 4.

Quante sono le tue?

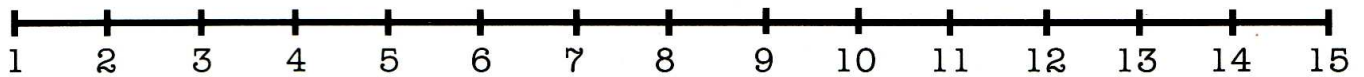
Palline mie

Palline tue

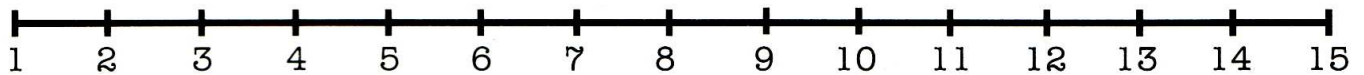
Palline di tutti e due



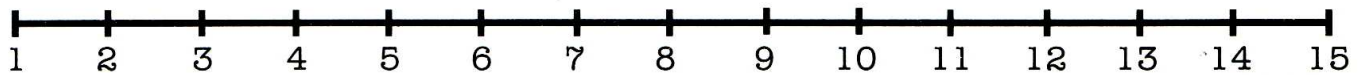
$$9 + 3$$



$$10 + 4$$



$$4 + 10$$



$$11 + 1$$

Ho 6 palline.


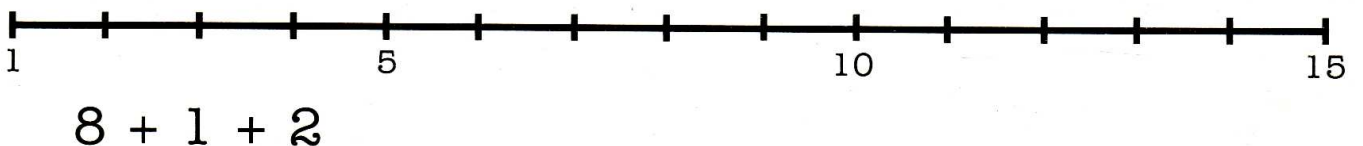

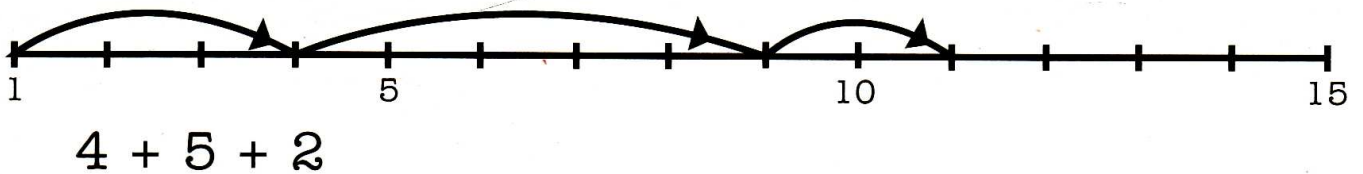
Tu ne hai 11.

Quante palline hai più di me?

Palline che ho io

Palline che hai tu

Palline di tutti e due



Maria ha 6 fiori.

Anna ne ha 5.

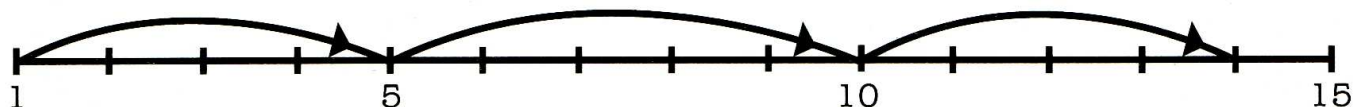
Regalano i fiori alla mamma.

Così la mamma riceve in tutto

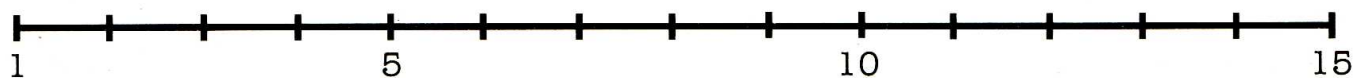
Fiori di Maria

Fiori di Anna

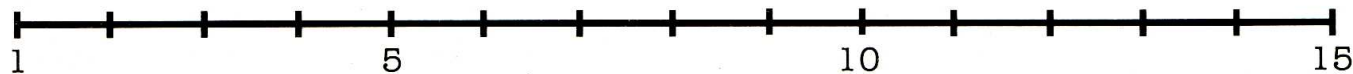
Fiori che ha la mamma



$$5 + 5 + 4$$



$$5 + 4 + 5$$



$$3 + 5 + 6$$



$$5 + 5 + 2$$

Devi apparecchiare la tavola per 5 persone.

Quante posate metti?

Quanti piatti fondi?

Quanti piatti piani?

Quanti bicchieri?

E quanti tovaglioli?

Che altro metteresti?



$8 + 7 \dots$

$10 + 5 \dots$

$9 + 5 \dots$

$10 + 3 \dots$

$7 + 8 \dots$

$5 + 10 \dots$

$5 + 6 \dots$

$3 + 10 \dots$

$7 + 3 \dots$

$10 + 2 \dots$

$9 + 3 \dots$

$2 + 11 \dots$

$6 + 6 \dots$

$5 + 5 \dots$